
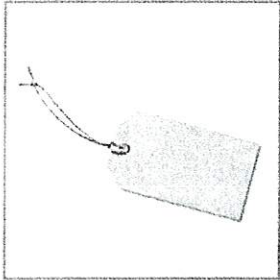


Little Writer



Copy the words



tag

.....

.....

bag

.....

.....

rag

.....

.....

wag

.....

.....

Name _____

1.ATO.8

Fill in the missing number to complete the equation. Select two equations and justify why it is correct.

$8 + \underline{\quad} = 12$

$\underline{\quad} - 5 = 7$

$3 = \underline{\quad} - 7$

$6 = \underline{\quad} - 3$

Name _____

1.ATO.8

Put a check next to each equation that would be true if you placed a 5 in the blank. Select two equations and justify why it is correct.

$7 - \underline{\quad} = 5$

$\underline{\quad} + 9 = 14$

$5 + \underline{\quad} = 11$

$\underline{\quad} - 3 = 2$






$13 - \underline{\quad} = 8$

$\underline{\quad} + 3 = 8$

Name: _____


Pushes

Pulls



Good Choice or Bad Choice?

Name: _____

Good Choice 	Bad Choice 